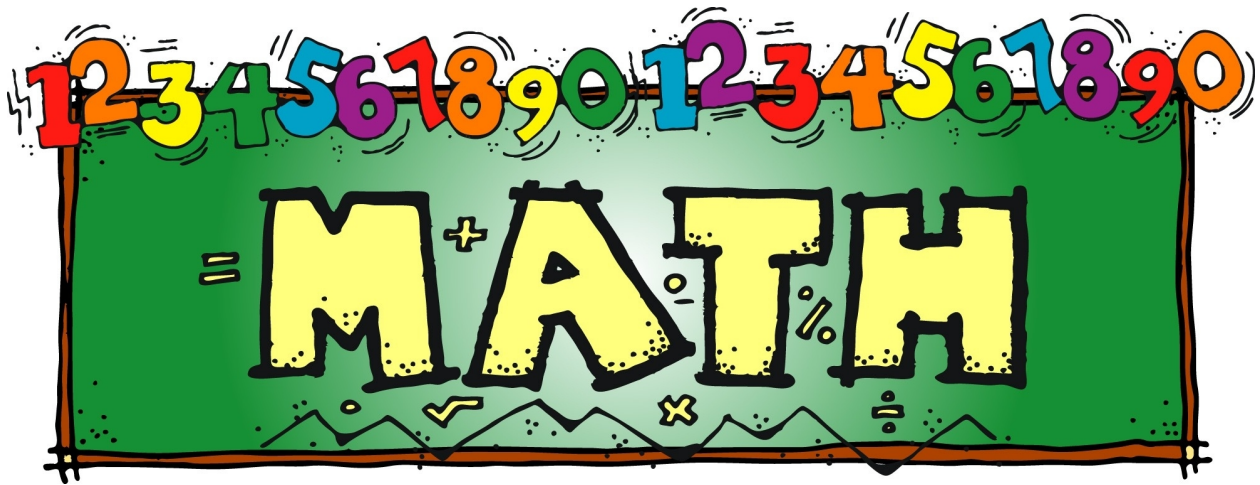


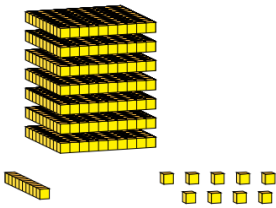
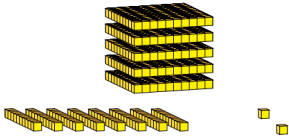
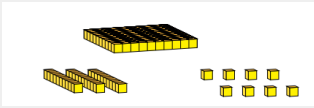
Grade 3 Math Practice Booklet

December - March

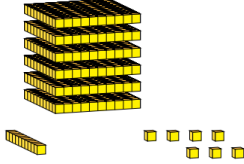
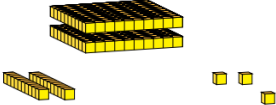
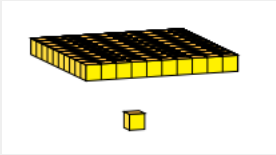


Name: _____

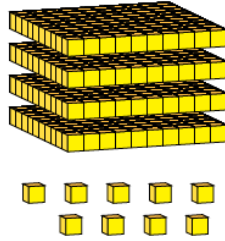
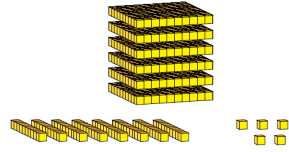
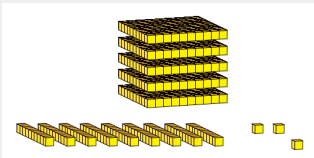
Week 1

<p>Day 1 Quick Check</p> <p>5 + 9 = 6 + 8 = 4 + 7 = 3 + 8 = 6 + 6 = 9 + 7 = 2 + 13 = 11 + 4 =</p>	<p>Fill in the missing numbers</p> <p>5, 10, 15, _____, 25, 30, 35,</p> <p>_____, 45, _____, _____</p>	<p>What number is 100 more than 432?</p> <p>_____</p>	<p>What number does this show?</p> 	<p>Write in standard form:</p> <p>5 hundreds, 7 tens, 2 ones</p> <p>_____</p>	<p>Add</p> $\begin{array}{r} 52 \\ + 35 \\ \hline \end{array}$
<p>Day 2 Quick Check</p> <p>4 + 8 = 7 + 8 = 5 + 3 = 4 + 9 = 6 + 8 = 9 + 3 = 12 + 4 = 15 + 2 =</p>	<p>Insert <, >, or =</p> <p>675 657</p>	<p>Fill in the missing numbers</p> <p>32, 34, 36, _____,</p> <p>_____, 42, 44, _____,</p> <p>48, _____</p>	<p>Write in standard form:</p> <p>Three hundred ninety seven</p> <p>_____</p>	<p>Add</p> $\begin{array}{r} 39 \\ + 52 \\ \hline \end{array}$	<p>What number is 100 more than 5378?</p> <p>_____</p>
<p>Day 3 Quick Check</p> <p>3 + 9 = 9 + 8 = 4 + 6 = 5 + 7 = 7 + 9 = 2 + 9 = 4 + 14 = 13 + 3 =</p>	<p>Add</p> $\begin{array}{r} 75 \\ + 17 \\ \hline \end{array}$	<p>Insert <, >, or =</p> <p>932 939</p>	<p>Fill in the missing numbers</p> <p>142, 152, 162, _____, 182,</p> <p>192, _____, 212, _____</p>	<p>Write in standard form:</p> <p>600 + 40 + 3</p> <p>_____</p>	<p>What number does this show?</p> 
<p>Day 4 Quick Check</p> <p>5 + 10 = 6 + 3 = 7 + 7 = 5 + 8 = 3 + 9 = 10 + 7 = 9 + 9 = 10 + 4 =</p>	<p>What number is 1000 more than 2569?</p> <p>_____</p>	<p>What number does this show?</p> 	<p>Add</p> $\begin{array}{r} 25 \\ + 32 \\ \hline \end{array}$	<p>Fill in the missing numbers</p> <p>47, 52, 57, _____, 67,</p> <p>72, _____, 82, 87, _____</p>	<p>Insert <, >, or =</p> <p>451 415</p>


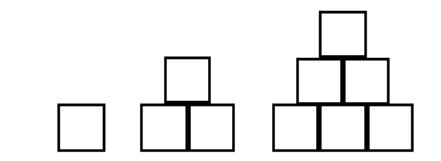
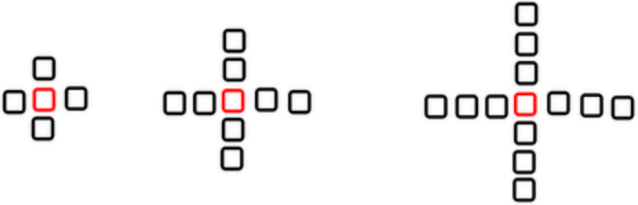
Week 2

<p>Day 1</p> <p style="text-align: center;">Quick Check</p> <p>9 - 5 = 8 - 6 = 7 - 4 = 8 - 3 = 6 - 6 = 9 - 7 = 13 - 2 = 11 - 4 =</p>	<p>Fill in the missing numbers</p> <p>3, 6, 9, _____, 15, 18, 21,</p> <p>_____, _____, 30, _____</p>	<p>What number is 100 <u>less</u> than 873?</p> <p style="text-align: center;">_____</p>	<p>What number does this show?</p> 	<p>Turtle A and Turtle B are in a race. It takes Turtle A 37 seconds to finish the race. It takes Turtle B 45 seconds. Who won the race? By how many seconds did they win the race?</p> <p style="text-align: center;">_____</p>	<p>Subtract</p> $\begin{array}{r} 75 \\ - 32 \\ \hline \end{array}$
<p>Day 2</p> <p style="text-align: center;">Quick Check</p> <p>8 - 4 = 8 - 7 = 5 - 3 = 9 - 4 = 8 - 6 = 9 - 3 = 12 - 4 = 15 - 2 =</p>	<p>Insert <, >, or =</p> <p style="text-align: center;">356 653</p>	<p>Fill in the missing numbers</p> <p>4, 8, 12, _____, 20, _____,</p> <p>28, _____, _____, 40</p>	<p>Write in standard form:</p> <p>nine hundred forty-eight</p> <p style="text-align: center;">_____</p>	<p>Subtract</p> $\begin{array}{r} 89 \\ - 43 \\ \hline \end{array}$	<p>What number is 1000 <u>more</u> than 7480?</p> <p style="text-align: center;">_____</p>
<p>Day 3</p> <p style="text-align: center;">Quick Check</p> <p>9 - 2 = 9 - 8 = 6 - 4 = 7 - 5 = 9 - 7 = 9 - 5 = 14 - 4 = 13 - 3 =</p>	<p>Subtract</p> $\begin{array}{r} 72 \\ - 16 \\ \hline \end{array}$	<p>Insert <, >, or =</p> <p style="text-align: center;">127 127</p>	<p>Fill in the missing numbers</p> <p>100, 125, 150, _____,</p> <p>200, 225, _____, 275,</p> <p>_____</p>	<p>Josh did 22 laps in the gym. Eric did 34 laps. How many laps did they do in all?</p> <p style="text-align: center;">_____</p>	<p>What number does this show?</p> 
<p>Day 4</p> <p style="text-align: center;">Quick Check</p> <p>10 - 5 = 6 - 3 = 7 - 7 = 8 - 2 = 8 - 5 = 10 - 7 = 9 - 9 = 10 - 4 =</p>	<p>What number is 1000 <u>less</u> than 3941?</p> <p style="text-align: center;">_____</p>	<p>What number does this show?</p> 	<p>Subtract</p> $\begin{array}{r} 50 \\ - 34 \\ \hline \end{array}$	<p>Fill in the missing numbers</p> <p>21, 23, _____, 27, 29,</p> <p>_____, _____, 35, 37</p>	<p>Put in order from <u>least</u> to <u>greatest</u></p> <p style="text-align: center;">437, 375, 451, 415</p> <p style="text-align: center;">_____</p>


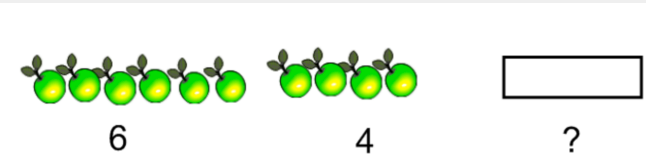
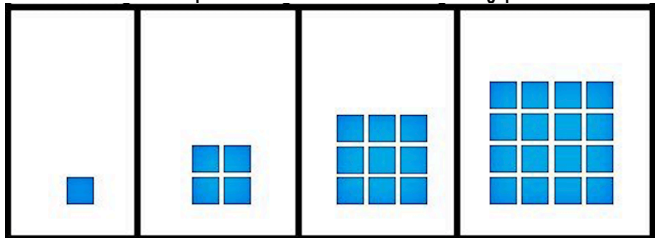

Week 3

<p>Day 1</p> <p style="text-align: center;">Quick Check</p> <p>9 + 2 = 8 + 7 =</p> <p>3 + 4 = 11 + 3 =</p> <p>6 + 8 = 9 + 7 =</p> <p>13 + 5 = 11 + 8 =</p>	<p>Fill in the missing numbers</p> <p>75, 70, 65, _____, 55, 50,</p> <p>_____, _____, 35</p>	<p>What number is 100 <u>more</u> than 549?</p> <p style="text-align: center;">_____</p>	<p>What number does this show?</p> 	<p>Gus has 40 apples. Some are red and some are green. How many red and green apples might Gus have?</p> <p style="text-align: center;">_____</p>	<p>Add</p> $\begin{array}{r} 44 \\ + 38 \\ \hline \end{array}$
<p>Day 2</p> <p style="text-align: center;">Quick Check</p> <p>5 + 4 = 9 + 7 =</p> <p>10 + 3 = 8 + 4 =</p> <p>8 + 6 = 9 + 6 =</p> <p>12 + 5 = 14 + 2 =</p>	<p>Insert <, >, or =</p> <p style="text-align: center;">455 544</p>	<p>Fill in the missing numbers</p> <p>20, 24, _____, 32, _____,</p> <p>40, 44, _____, _____, 56</p>	<p>Write in standard form:</p> <p style="text-align: center;">500 + 30 + 7</p> <p style="text-align: center;">_____</p>	<p>Add</p> $\begin{array}{r} 19 \\ + 56 \\ \hline \end{array}$	<p>What number is 1000 <u>less</u> than 3790?</p> <p style="text-align: center;">_____</p>
<p>Day 3</p> <p style="text-align: center;">Quick Check</p> <p>8 + 2 = 8 + 8 =</p> <p>6 + 5 = 7 + 5 =</p> <p>9 + 7 = 8 + 5 =</p> <p>14 + 4 = 15 + 3 =</p>	<p>Add</p> $\begin{array}{r} 78 \\ + 6 \\ \hline \end{array}$	<p>Insert <, >, or =</p> <p style="text-align: center;">767 765</p>	<p>Fill in the missing numbers</p> <p>50, 48, 46, _____, 42, 40,</p> <p>_____, _____, 34, 32, 30</p>	<p>Sandy started the year with 24 pencils. She has used 8 of them so far. How many pencils does she have left?</p> <p style="text-align: center;">_____</p>	<p>What number does this show?</p> 
<p>Day 4</p> <p style="text-align: center;">Quick Check</p> <p>10 + 5 = 6 + 2 =</p> <p>7 + 7 = 11 + 2 =</p> <p>8 + 9 = 10 + 6 =</p> <p>9 + 9 = 12 + 5 =</p>	<p>What number is 1000 <u>more</u> than 943?</p> <p style="text-align: center;">_____</p>	<p>What number does this show?</p> 	<p>Add</p> $\begin{array}{r} 37 \\ + 24 \\ \hline \end{array}$	<p>Fill in the missing numbers</p> <p>30, 33, 36, 39, _____, 45,</p> <p>_____, _____, 54</p>	<p>Put in order from <u>least</u> to <u>greatest</u></p> <p>565, 621, 553, 499, 600</p> <p style="text-align: center;">_____</p>

Week 4

<p>Day 1</p> <p>Quick Check</p> <p>9 - 2 = 8 - 7 =</p> <p>4 - 3 = 11 - 3 =</p> <p>8 - 6 = 9 - 7 =</p> <p>13 - 5 = 11 - 8 =</p>	<p>Fill in the missing numbers</p> <p>140, 130, _____, 110,</p> <p>_____, _____, 80, 70</p>	<p>Write this number in standard form:</p> <p>four hundred twenty seven</p> <p>_____</p>	<p>Draw the next 2 pictures that come in this pattern:</p>  <p>Label the pattern using letters (example: A B A B).</p>	<p>Subtract</p> $\begin{array}{r} 59 \\ - 32 \\ \hline \end{array}$
<p>Day 2</p> <p>Quick Check</p> <p>5 - 4 = 9 - 7 =</p> <p>10 - 3 = 8 - 4 =</p> <p>8 - 6 = 9 - 6 =</p> <p>12 - 5 = 14 - 2 =</p>	<p>Finish this pattern:</p> <p>400, 450, _____, 550,</p> <p>600, _____, _____</p>	<p>Finish this pattern (hint: how many are being added each time?).</p> <p>1, 2, 4, 7, 11, 16, _____, _____</p>	<p>Subtract</p> $\begin{array}{r} 39 \\ - 6 \\ \hline \end{array}$	<p>Draw the next picture in this increasing pattern:</p> 
<p>Day 3</p> <p>Quick Check</p> <p>8 - 2 = 8 - 8 =</p> <p>6 - 5 = 7 - 5 =</p> <p>9 - 7 = 8 - 5 =</p> <p>14 - 4 = 15 - 3 =</p>	<p>Draw the next picture for this increasing pattern:</p> 		<p>Subtract</p> $\begin{array}{r} 72 \\ - 44 \\ \hline \end{array}$	<p>Fill in the missing numbers</p> <p>50, 48, 46, _____, 42, 40,</p> <p>_____, _____, 34, 32, 30</p>
<p>Day 4</p> <p>Quick Check</p> <p>10 - 5 = 6 - 2 =</p> <p>7 - 7 = 11 - 2 =</p> <p>9 - 8 = 10 - 6 =</p> <p>9 - 9 = 12 - 5 =</p>	<p>Fill in this decreasing number pattern:</p> <p>1435, 1335, 1235, _____,</p> <p>1035, _____, 835, _____</p>	<p>Create an ABBC pattern below. Repeat the pattern at least 3 times. Circle the pattern core.</p>	<p>Subtract</p> $\begin{array}{r} 61 \\ - 24 \\ \hline \end{array}$	

Week 5

<p>Day 1</p> <p style="text-align: center;">Quick Check</p> <p>8 + 4 = 6 + 7 = 5 + 9 = 12 + 7 = 7 + 3 = 2 + 6 = 10 + 6 = 4 + 7 =</p>	<p>Complete this number pattern:</p> <p>0, 50, 100, 150, 200, 250, 300, _____, _____</p>	<p>Write this number in standard form:</p> <p style="text-align: center;">1000 + 600 + 30 + 9 _____</p>	<p>Draw the next 2 pictures that come in this pattern:</p> <p style="text-align: center;"></p> <p>Label the pattern using letters (example: A B A B).</p>	<p>Add</p> <p style="text-align: center;">52 + 34</p>
<p>Day 2</p> <p style="text-align: center;">Quick Check</p> <p>1 + 7 = 4 + 10 = 8 + 4 = 6 + 6 = 5 + 5 = 2 + 8 = 4 + 5 = 9 + 3 =</p>	<p>List in order from <u>greatest</u> to <u>least</u>:</p> <p style="text-align: center;">643, 346, 364, 463 _____</p>	<p>CHALLENGE: Finish this pattern:</p> <p>1, 2, 4, 5, 7, 8, 10, _____, _____</p>	<p>Add</p> <p style="text-align: center;">39 + 16</p>	<p>Draw the next picture in this decreasing pattern:</p> <p style="text-align: center;"></p>
<p>Day 3</p> <p style="text-align: center;">Quick Check</p> <p>10 + 4 = 7 + 1 = 9 + 9 = 8 + 3 = 3 + 3 = 4 + 9 = 6 + 2 = 11 + 5 =</p>	<p>Draw the next picture for this increasing pattern:</p> <p style="text-align: center;"></p>		<p>Add</p> <p style="text-align: center;">45 + 25</p>	<p>CHALLENGE: Complete this number pattern:</p> <p>3, 6, 5, 8, 7, 10, 9, _____, _____</p>
<p>Day 4</p> <p style="text-align: center;">Quick Check</p> <p>10 + 1 = 6 + 2 = 7 + 7 = 11 + 4 = 4 + 5 = 3 + 10 = 9 + 3 = 15 + 3 =</p>	<p>Fill in this decreasing number pattern:</p> <p>1470, 1460, 1450, 1440, 1430, 1420, _____, _____ _____</p>	<p>Draw the next picture in this increasing pattern:</p> <p style="text-align: center;"></p>		<p>Add</p> <p style="text-align: center;">63 + 36</p>





Week 6

<p>Day 1</p> <p style="text-align: center;">Quick Check</p> <p>3 + 4 = 7 + 7 =</p> <p>6 + 7 = 11 + 6 =</p> <p>7 + 4 = 4 + 5 =</p> <p>12 + 6 = 2 + 9 =</p>	<p>Make the <u>smallest</u> 4-digit number possible using the following digits (use each digit only once)</p> <p style="text-align: center;">4, 3, 2, 1</p> <p style="text-align: center;">_____</p>	<p>Write this number in standard form:</p> <p style="text-align: center;">1000 + 600 + 30 + 9</p> <p style="text-align: center;">_____</p>	<p>You are doing chores around the house. On day 1, you get paid \$0.50. On day 2, you get paid \$1.00. On day 3, you get paid \$1.50. If this pattern continues, how much will you get paid on day 5?</p>	<p>Add</p> <p style="text-align: center;">19 + 15</p>
<p>Day 2</p> <p style="text-align: center;">Quick Check</p> <p>3 + 5 = 4 + 15 =</p> <p>8 + 7 = 8 + 3 =</p> <p>5 + 1 = 5 + 9 =</p> <p>7 + 5 = 7 + 3 =</p>	<p>Write the following numeral: six thousand forty-seven</p> <p style="text-align: center;">_____</p>	<p>Make the <u>smallest</u> 3-digit number possible using the following digits (use each digit only once)</p> <p style="text-align: center;">7, 4, 9</p> <p style="text-align: center;">_____</p>	<p>Add</p> <p style="text-align: center;">40 + 20</p>	<p>Draw the missing picture in this pattern:</p> <div style="text-align: center; border: 1px solid black; padding: 5px; margin: 10px 0;"> </div>
<p>Day 3</p> <p style="text-align: center;">Quick Check</p> <p>12 + 5 = 4 + 1 =</p> <p>9 + 8 = 6 + 3 =</p> <p>3 + 1 = 2 + 9 =</p> <p>5 + 2 = 12 + 4 =</p>	<p>If this pattern continued to repeat, what would be the 10th picture in the pattern?</p> <div style="text-align: center; margin: 10px 0;"> </div>		<p>Add</p> <p style="text-align: center;">39 + 22</p>	<p>Make the <u>largest</u> 4-digit number possible using the following digits (use each digit only once)</p> <p style="text-align: center;">3, 2, 1, 0</p> <p style="text-align: center;">_____</p>
<p>Day 4</p> <p style="text-align: center;">Quick Check</p> <p>11 + 1 = 8 + 3 =</p> <p>5 + 7 = 14 + 4 =</p> <p>3 + 3 = 1 + 10 =</p> <p>10 + 3 = 12 + 7 =</p>	<p>Make the <u>largest</u> 3-digit number possible using the following digits (use each digit only once)</p> <p style="text-align: center;">7, 4, 9</p> <p style="text-align: center;">_____</p>	<p>Draw the next picture in this increasing pattern:</p> <div style="text-align: center; margin: 10px 0;"> </div>		



Week 7

<p>Day 1</p> <p style="text-align: center;">Quick Check</p> <p>8 - 5 = 6 - 1 = 5 - 2 = 12 - 7 = 7 - 3 = 2 - 2 = 10 - 6 = 4 - 3 =</p>	<p>Complete this number pattern:</p> <p>100, 125, 150, 175, 200, 225, _____, _____</p>	<p>Write this number in standard form:</p> <p style="text-align: center;">5000 + 200 + 90 + 1 _____</p>	<p>Draw the next picture for this pattern:</p> <div style="text-align: center;"> </div>	<p>Subtract</p> <p style="text-align: center;">57 - 23</p>
<p>Day 2</p> <p style="text-align: center;">Quick Check</p> <p>5 - 2 = 10 - 4 = 8 - 6 = 6 - 4 = 5 - 5 = 8 - 3 = 9 - 5 = 9 - 2 =</p>	<p>Make the <u>smallest</u> 4-digit number possible using the following digits (use each digit only once)</p> <p style="text-align: center;">4, 7, 2, 1 _____</p>	<p>What is 100 <u>more</u> than 237?</p> <p style="text-align: center;">_____</p>	<p>Subtract</p> <p style="text-align: center;">39 - 8</p>	<p>Create and draw the first 3 pictures for a decreasing pattern:</p>
<p>Day 3</p> <p style="text-align: center;">Quick Check</p> <p>10 - 4 = 7 - 1 = 9 - 9 = 8 - 3 = 3 - 1 = 9 - 8 = 6 - 2 = 11 - 5 =</p>	<p>Draw the next 2 pictures in this pattern:</p> <div style="text-align: center;"> </div>		<p>Subtract</p> <p style="text-align: center;">45 - 25</p>	<p>What is 100 <u>less</u> than 765?</p> <p style="text-align: center;">_____</p>
<p>Day 4</p> <p style="text-align: center;">Quick Check</p> <p>10 - 1 = 6 - 2 = 7 - 7 = 11 - 4 = 7 - 5 = 3 - 1 = 9 - 2 = 15 - 3 =</p>	<p>Make the <u>largest</u> 3-digit number possible using the following digits (use each digit only once)</p> <p style="text-align: center;">5, 3, 9 _____</p>	<p>Draw the next picture in this increasing pattern:</p> <div style="text-align: center;"> </div>		


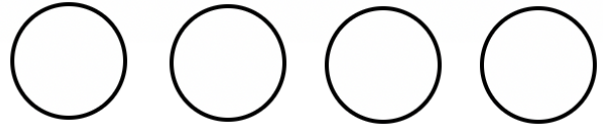
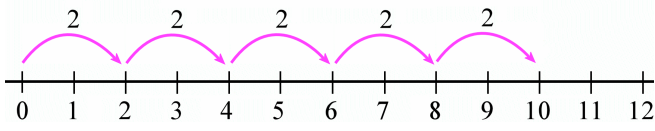
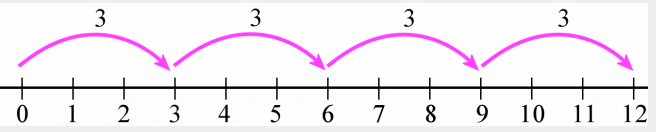
Week 8

<p>Day 1</p> <p style="text-align: center;">Quick Check</p> <p>8 + 6 = 6 + 2 = 4 + 2 = 10 + 7 = 6 + 3 = 2 + 2 = 9 + 6 = 4 + 5 =</p>	<p>Complete this number pattern:</p> <p>1, 3, 5, 7, 9, 11, _____, _____</p>	<p>What number comes <u>after</u> 451?</p> <p style="text-align: center;">_____</p>	<p>There are four plates of muffins, Each plate has 5 muffins on it.</p> <div style="text-align: center;">  </div>	<p>How many muffins are there in all?</p> <p style="text-align: center;">_____</p>
<p>Day 2</p> <p style="text-align: center;">Quick Check</p> <p>3 + 2 = 10 + 4 = 8 + 2 = 3 + 4 = 5 + 5 = 8 + 8 = 8 + 1 = 9 + 2 =</p>	<p>Write an odd number that comes between 43 and 49.</p> <p style="text-align: center;">_____</p>	<p>What number comes <u>before</u> 783?</p> <p style="text-align: center;">_____</p>	<div style="text-align: center;">  </div>	<p>Write a multiplication sentence to show how many muffins there are.</p> <p style="text-align: center;">_____</p>
<p>Day 3</p> <p style="text-align: center;">Quick Check</p> <p>10 + 5 = 7 + 2 = 9 + 9 = 5 + 3 = 3 + 3 = 0 + 8 = 6 + 5 = 12 + 4 =</p>	<p>There are 2 fishbowls. Each fishbowl has 4 fish in it.</p> <div style="text-align: center;">  </div>	<p>How many fish are there in all?</p> <p style="text-align: center;">_____</p>	<p>Add</p> <p style="text-align: center;">32 + 6</p>	<p>Write an even number that comes between 18 and 25.</p> <p style="text-align: center;">_____</p>
<p>Day 4</p> <p style="text-align: center;">Quick Check</p> <p>9 + 1 = 5 + 2 = 7 + 7 = 13 + 4 = 6 + 5 = 3 + 1 = 8 + 2 = 11 + 3 =</p>	<div style="text-align: center;">  </div>	<p>How many fish are there in all?</p> <p style="text-align: center;">_____</p>	<p>Make tally marks for the number 12.</p>	<p>How many tires are there in 3 bicycles?</p> <p style="text-align: center;">_____</p>

Week 9

<p>Day 1</p> <p>Quick Check</p> <p>8 + 2 = 9 + 2 =</p> <p>7 + 2 = 8 + 7 =</p> <p>5 + 1 = 3 + 3 =</p> <p>10 + 6 = 6 + 5 =</p>	<p>Complete this number pattern:</p> <p>60, 55, 50, 45, _____,</p> <p>_____</p>	<p>What number comes <u>after</u> 599?</p> <p>_____</p>	<p>There are four plates of strawberries, Each plate has 3 strawberries on it.</p> 	<p>How many strawberries are there in all?</p> <p>_____</p>	
<p>Day 2</p> <p>Quick Check</p> <p>3 + 5 = 10 + 7 =</p> <p>8 + 3 = 3 + 8 =</p> <p>6 + 6 = 8 + 9 =</p> <p>4 + 4 = 2 + 2 =</p>	<p>Write an odd number that comes between 14 and 20.</p> <p>_____</p>	<p>What number comes <u>before</u> 310?</p> <p>_____</p>		<p>Write a multiplication sentence to show how many strawberries there are.</p> <p>_____</p>	
<p>Day 3</p> <p>Quick Check</p> <p>10 + 3 = 9 + 2 =</p> <p>7 + 9 = 4 + 7 =</p> <p>4 + 3 = 0 + 4 =</p> <p>2 + 5 = 12 + 2 =</p>	<p>There are 2 groups of penguins. Each group has 3 penguins in it.</p> 	<p>How many penguins are there in all?</p> <p>_____</p>	<p>Write a multiplication sentence to show how many penguins there are.</p> <p>_____</p>	<p>Add</p> <p>51 + 32</p>	<p>Write an even number that comes between 31 and 35.</p> <p>_____</p>

Week 10

<p>Day 1</p> <p style="text-align: center;">Quick Check</p> <p> $1 \times 3 =$ $5 \times 1 =$ $4 \times 2 =$ $3 \times 1 =$ $5 \times 0 =$ $2 \times 4 =$ $3 \times 2 =$ $5 \times 2 =$ </p>	<p>What number comes <u>before</u> 1345?</p> <p style="text-align: center;">_____</p>	<p>Write a multiplication sentence for this addition sentence:</p> <p style="text-align: center;">$1 + 1 + 1 + 1 + 1$</p> <p style="text-align: center;">_____</p>	<p>There are five pots of flowers. Each pot has 3 flowers in it.</p> 	<p>Write a multiplication sentence to show how many flowers there are.</p> <p style="text-align: center;">_____</p>	
<p>Day 2</p> <p style="text-align: center;">Quick Check</p> <p> $2 \times 3 =$ $3 \times 1 =$ $1 \times 2 =$ $4 \times 2 =$ $0 \times 3 =$ $5 \times 3 =$ $3 \times 4 =$ $2 \times 2 =$ </p>	<p>What number is 100 <u>more</u> than 567?</p> <p style="text-align: center;">_____</p>	<p>Complete the number pattern:</p> <p>4, 7, 10, 13, 16, _____, _____</p>	<p>You have 8 muffins. You place the muffins onto 4 plates. You put the same number of muffins on each plate. Draw a picture of the muffins on the plates below.</p> 	<p>Write a division sentence to show how many muffins are on each plate.</p> <p style="text-align: center;">_____</p>	
<p>Day 3</p> <p style="text-align: center;">Quick Check</p> <p> $1 \times 5 =$ $3 \times 1 =$ $4 \times 3 =$ $3 \times 2 =$ $3 \times 0 =$ $2 \times 5 =$ $0 \times 2 =$ $4 \times 2 =$ </p>			<p>Write the multiplication sentence that the number line shows.</p> <p style="text-align: center;">_____</p>	<p>Subtract</p> $\begin{array}{r} 49 \\ - 30 \\ \hline \end{array}$	<p>What number comes <u>after</u> 3762?</p> <p style="text-align: center;">_____</p>
<p>Day 4</p> <p style="text-align: center;">Quick Check</p> <p> $1 \times 1 =$ $5 \times 2 =$ $4 \times 4 =$ $3 \times 2 =$ $1 \times 0 =$ $2 \times 1 =$ $2 \times 2 =$ $4 \times 3 =$ </p>	<p>Write an even number comes between 113 and 117</p> <p style="text-align: center;">_____</p>	<p>What number is 100 <u>less</u> than 942?</p> <p style="text-align: center;">_____</p>	<p>Write a multiplication sentence for this addition sentence:</p> <p style="text-align: center;">$4 + 4 + 4$</p> <p style="text-align: center;">_____</p>	<p>What multiplication sentence does this number line show?</p>  <p style="text-align: center;">_____</p>	

Week 11

Day 1

Quick Check

$1 \times 4 =$ $5 \times 2 =$
 $3 \times 2 =$ $4 \times 1 =$
 $4 \times 0 =$ $2 \times 3 =$
 $1 \times 2 =$ $5 \times 4 =$

Write in standard form:

Five thousand eight hundred nineteen

Write a multiplication sentence for this addition sentence:

$4 + 4 + 4 + 4$

There are three circles with 4 happy faces in each circle.



Write a multiplication sentence to show how many happy faces there are.

Day 2

Quick Check


$2 \times 0 =$ $3 \times 2 =$
 $1 \times 3 =$ $1 \times 2 =$
 $0 \times 5 =$ $5 \times 2 =$
 $3 \times 3 =$ $4 \times 2 =$

Complete the multiplication sentence.



_____ \times _____ = _____

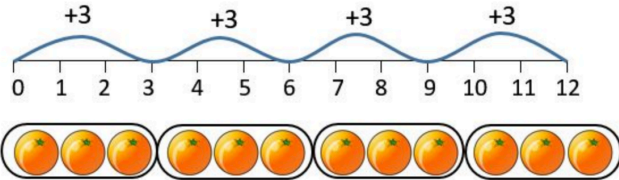
You have 9 cookies that you put onto 3 plates. You put the same number of cookies on each plate. Draw a picture of the shared cookies. Write a division sentence to show how you divided the cookies.



Day 3

Quick Check

$1 \times 3 =$ $3 \times 4 =$
 $4 \times 4 =$ $5 \times 2 =$
 $3 \times 2 =$ $3 \times 5 =$
 $0 \times 4 =$ $4 \times 3 =$



Write the multiplication sentence that the number line shows.

Add

56
 $+ 24$

Write in standard form:

$2000 + 300 + 70 + 1$

Day 4

Quick Check

$1 \times 1 =$ $0 \times 0 =$
 $5 \times 5 =$ $4 \times 4 =$
 $4 \times 0 =$ $3 \times 3 =$
 $3 \times 3 =$ $2 \times 2 =$

Complete the multiplication sentence.

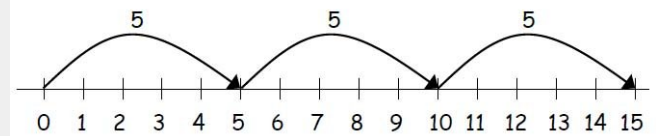


_____ \times _____ = _____











Write a multiplication sentence for this addition sentence:

$1 + 1 + 1$

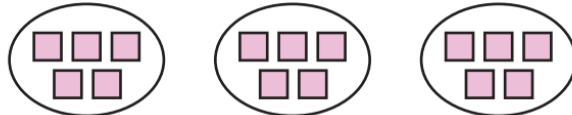


What multiplication sentence does this number line show?




Week 12

<p>Day 1</p> <p style="text-align: center;">Quick Check</p> <p>1 × 3 = 5 × 1 = 4 × 2 = 3 × 1 = 5 × 0 = 2 × 4 = 3 × 2 = 5 × 2 =</p>	<p>What is 1000 <u>more</u> than 7632?</p> <p style="text-align: center;">_____</p>	<p>Write a multiplication sentence for this addition sentence:</p> <p style="text-align: center;">5 + 5 + 5</p> <p style="text-align: center;">_____</p>	<p>Divide 12 blocks into equal groups of 3.</p> <p>How many blocks are in each group? _____</p>	<p>Write a division sentence to show how many blocks are in each group.</p> <p style="text-align: center;">_____</p>
<p>Day 2</p> <p style="text-align: center;">Quick Check</p> <p>2 × 3 = 3 × 1 = 1 × 2 = 4 × 2 = 0 × 3 = 5 × 3 = 3 × 4 = 2 × 2 =</p>	<p>Divide 15 blocks into equal groups of 5.</p> <p>How many blocks are in each group?</p>	<p>What multiplication sentence does this picture show? This is a multiple choice question – please circle a), b), c), or d) as your answer.</p> <div style="display: flex; justify-content: space-around; align-items: center;"> <div style="border: 1px solid black; padding: 5px; text-align: center;">  </div> <div style="border: 1px solid black; padding: 5px; text-align: center;">  </div> <div style="border: 1px solid black; padding: 5px; text-align: center;">  </div> <div style="border: 1px solid black; padding: 5px; text-align: center;">  </div> </div> <p style="display: flex; justify-content: space-around; margin-top: 10px;"> a) 4 × 4 b) 1 × 4 c) 4 × 3 d) 2 × 4 </p>		
<p>Day 3</p> <p style="text-align: center;">Quick Check</p> <p>1 × 5 = 3 × 1 = 4 × 3 = 3 × 2 = 3 × 0 = 2 × 5 = 0 × 2 = 4 × 2 =</p>	<p>What multiplication sentence does this picture show? This is a multiple choice question – please circle a), b), c), or d) as your answer.</p> <div style="display: flex; justify-content: space-around; align-items: center;">      </div> <p style="display: flex; justify-content: space-around; margin-top: 10px;"> a) 2 × 2 b) 5 × 3 c) 5 × 2 d) 2 × 4 </p>		<p>Subtract</p> $\begin{array}{r} 42 \\ -24 \\ \hline \end{array}$	<p>What is the missing number in this decreasing pattern?</p> <p style="text-align: center;">34, 31, 28, _____, 22, 19</p>
<p>Day 4</p> <p style="text-align: center;">Quick Check</p> <p>1 × 1 = 5 × 2 = 4 × 4 = 3 × 2 = 1 × 0 = 2 × 1 = 2 × 2 = 4 × 3 =</p>	<p>Complete the multiplication sentence.</p> <div style="text-align: center;">  <p style="margin-top: 10px;">_____ × _____ = _____</p> </div>		<p>Write an odd number that is between 26 and 30.</p> <p style="text-align: center;">_____</p>	<p>8 hockey sticks are divided into 2 equal groups. Draw a picture of this.</p> <p>Write a division sentence to show this picture.</p> <p style="text-align: center;">_____</p>

Week 13

<p>Day 1</p> <p>Quick Check</p> <p>$1 \times 4 =$ $5 \times 2 =$ $3 \times 2 =$ $4 \times 1 =$ $4 \times 0 =$ $2 \times 3 =$ $1 \times 2 =$ $5 \times 4 =$</p>	<p>What is 1000 less than 4237?</p> <p>_____</p>	<p>Write a multiplication sentence for this addition sentence:</p> <p>$2 + 2 + 2 + 2$</p> <p>_____</p>	<p>Draw a picture to represent the following multiplication sentence:</p> <p>$3 \times 4 = 12$</p>	<p>Write an even number between 113 and 117</p> <p>_____</p>	
<p>Day 2</p> <p>Quick Check</p> <p>$2 \times 0 =$ $3 \times 2 =$ $1 \times 3 =$ $1 \times 2 =$ $0 \times 5 =$ $5 \times 2 =$ $3 \times 3 =$ $4 \times 2 =$</p>	<p>Divide 12 blocks into equal groups of 4.</p> <p>How many blocks are in each group? _____</p>	<p>What multiplication sentence does this picture show? This is a multiple choice question – please circle a), b), c), or d) as your answer.</p> <div style="display: flex; justify-content: space-around; align-items: center;">  </div> <p>a) 2×5 b) 3×3 c) 5×5 d) 3×5</p>			
<p>Day 3</p> <p>Quick Check</p> <p>$1 \times 3 =$ $3 \times 4 =$ $4 \times 4 =$ $5 \times 2 =$ $3 \times 2 =$ $3 \times 5 =$ $0 \times 4 =$ $4 \times 3 =$</p>	<p>What multiplication sentence does this picture show? This is a multiple choice question – please circle a), b), c), or d) as your answer.</p> <div style="display: flex; justify-content: space-around; align-items: center;">  </div> <p>a) 1×3 b) 3×3 c) 2×3 d) 4×3</p>			<p>Add</p> $\begin{array}{r} 147 \\ + 231 \\ \hline \end{array}$	<p>What is the missing number in this increasing pattern?</p> <p>41, 45, 49, 53, _____, 61</p>
<p>Day 4</p> <p>Quick Check</p> <p>$1 \times 1 =$ $0 \times 0 =$ $5 \times 5 =$ $4 \times 4 =$ $4 \times 0 =$ $3 \times 3 =$ $3 \times 3 =$ $2 \times 2 =$</p>	<p>Complete the multiplication sentence.</p> <div style="text-align: center;">  </div> <p>_____ \times _____ = _____</p>			<p>Add</p> $\begin{array}{r} 354 \\ + 475 \\ \hline \end{array}$	<p>Write 2 multiplication sentences using the numbers: 2, 8, 4</p> <p>_____</p> <p>_____</p> <p>Write 2 division sentences using the numbers: 2, 8, 4</p> <p>_____</p> <p>_____</p>

Week 14

<p>Day 1 Quick Check</p> <p>$5 + 9 =$ $6 + 8 =$ $4 + 7 =$ $3 + 8 =$ $6 + 6 =$ $9 + 7 =$ $2 + 13 =$ $11 + 4 =$</p>	<p>How many days are there in March?</p> <p style="text-align: center;">_____</p>	<p>What is the month before August?</p> <p style="text-align: center;">_____</p>	<p>What 2 days make up the weekend?</p> <p style="text-align: center;">_____</p>	<p>If today is June 3, what will the date be 1 week from today?</p> <p style="text-align: center;">_____</p>	<p>How many days are there in 2 weeks?</p> <p style="text-align: center;">_____</p>																																																
<p>Day 2 Quick Check</p> <p>$4 + 8 =$ $7 + 8 =$ $5 + 3 =$ $4 + 9 =$ $6 + 8 =$ $9 + 3 =$ $12 + 4 =$ $15 + 2 =$</p>	<p>Double 5 and then add 3. What do you get?</p> <p style="text-align: center;">_____</p>	<p>I am 14 more than 47. What number am I?</p> <p style="text-align: center;">_____</p>	<p>Write these numbers in increasing order:</p> <p style="text-align: center;">678 76 876 867 67</p> <p style="text-align: center;">_____</p>		<p>4 hundreds + 7 tens + 3 ones</p> <p style="text-align: center;">_____</p>																																																
<p>Day 3 Quick Check</p> <p>$3 + 9 =$ $9 + 8 =$ $4 + 6 =$ $5 + 7 =$ $7 + 9 =$ $2 + 9 =$ $4 + 14 =$ $13 + 3 =$</p>	<p>Add</p> <p style="text-align: center;"> $\begin{array}{r} 375 \\ + 417 \\ \hline \end{array}$ </p>	<p>Jo puts some balls in some rings like this:</p>  <p>What number sentence did she make? (choose 1 answer)</p> <p>a. $5 + 4 = 9$ b. $20 - 5 = 15$ c. $4 \times 5 = 20$</p>	<p>Write in standard form:</p> <p style="text-align: center;">$800 + 10 + 4$</p> <p style="text-align: center;">_____</p>	<p>What number comes after 3999?</p> <p style="text-align: center;">_____</p>																																																	
<p>Day 4 Quick Check</p> <p>$5 + 10 =$ $6 + 3 =$ $7 + 7 =$ $5 + 8 =$ $3 + 9 =$ $10 + 7 =$ $9 + 9 =$ $10 + 4 =$</p>	<p>What number is 3000 more than 3792?</p> <p style="text-align: center;">_____</p>	<p>Use $<$, $>$, or $=$ to make the statement correct:</p> <p style="text-align: center;">437 473</p> <p style="text-align: center;">_____</p>	<p>Using the graph, list the activities from favourite to least favourite:</p> <p style="text-align: center;">_____</p> <p style="text-align: center;">_____</p>	<div style="border: 1px solid black; padding: 5px;"> <p style="text-align: center;">Favorite Activity</p> <table border="1" style="width: 100%; border-collapse: collapse;"> <thead> <tr> <th style="writing-mode: vertical-rl; transform: rotate(180deg);">Activity</th> <th colspan="7"></th> </tr> </thead> <tbody> <tr> <td>Jumping Rope</td> <td style="background-color: #cccccc;"></td> <td style="background-color: #cccccc;"></td> <td style="background-color: #cccccc;"></td> <td style="background-color: #cccccc;"></td> <td></td> <td></td> <td></td> </tr> <tr> <td>Roller Skating</td> <td></td> <td></td> <td></td> <td></td> <td></td> <td></td> <td></td> </tr> <tr> <td>Bicycling</td> <td style="background-color: #cccccc;"></td> <td style="background-color: #cccccc;"></td> <td style="background-color: #cccccc;"></td> <td style="background-color: #cccccc;"></td> <td style="background-color: #cccccc;"></td> <td style="background-color: #cccccc;"></td> <td></td> </tr> <tr> <td></td> <td style="text-align: center;">0</td> <td style="text-align: center;">1</td> <td style="text-align: center;">2</td> <td style="text-align: center;">3</td> <td style="text-align: center;">4</td> <td style="text-align: center;">5</td> <td style="text-align: center;">6</td> </tr> <tr> <td></td> <td colspan="7" style="text-align: center;">Votes</td> </tr> </tbody> </table> </div>		Activity								Jumping Rope								Roller Skating								Bicycling									0	1	2	3	4	5	6		Votes						
Activity																																																					
Jumping Rope																																																					
Roller Skating																																																					
Bicycling																																																					
	0	1	2	3	4	5	6																																														
	Votes																																																				